

MNU 2-20a

Assessment 5

Silver Level

Name: \_\_\_\_\_

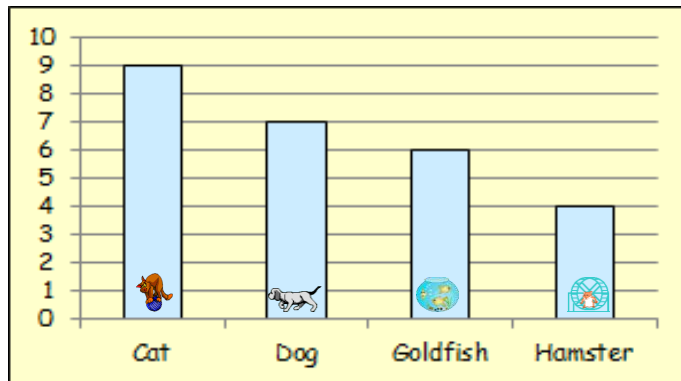
Score: \_\_\_\_\_

Percentage: %

Class: \_\_\_\_\_

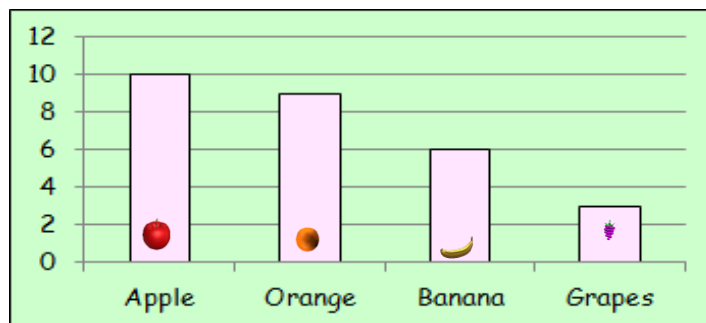
1

## Outcome 1 - Bar Graphs



- (a) How many pupils prefer cats than goldfish?  
 (b) How many pupils prefer dogs than hamsters?

2

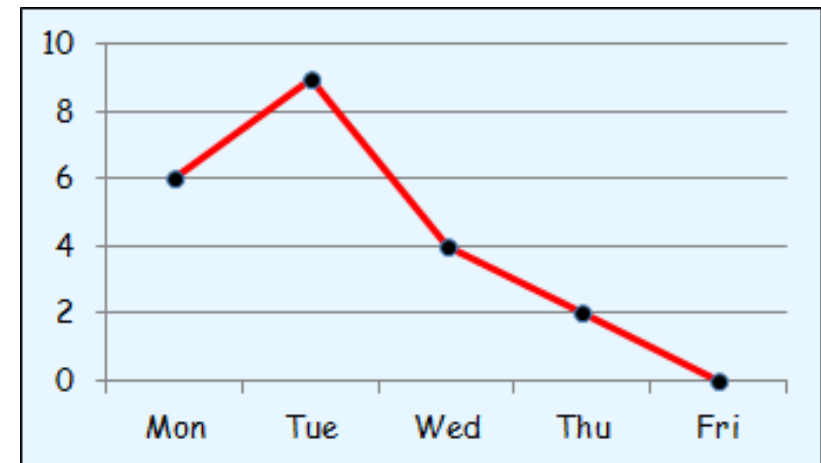


- (a) How many children chose an apple instead of grapes?  
 (b) How many children chose an orange instead of a banana?

## Outcome 2 - Line Graphs

3

The Line Graph shows the number of hours per day Abbey works in her cleaning job during the October week.



How many hours did she work altogether?