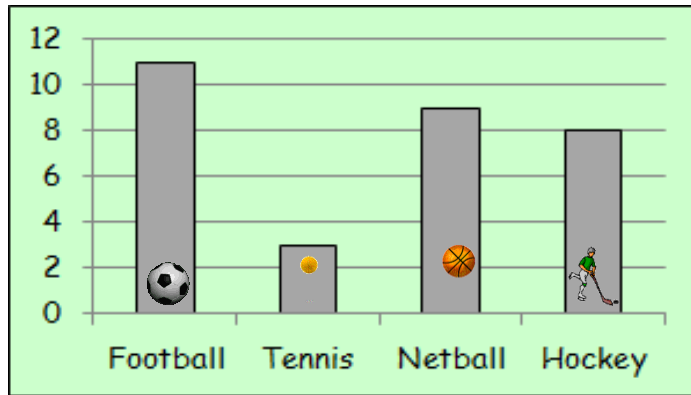


MNU 2-20a

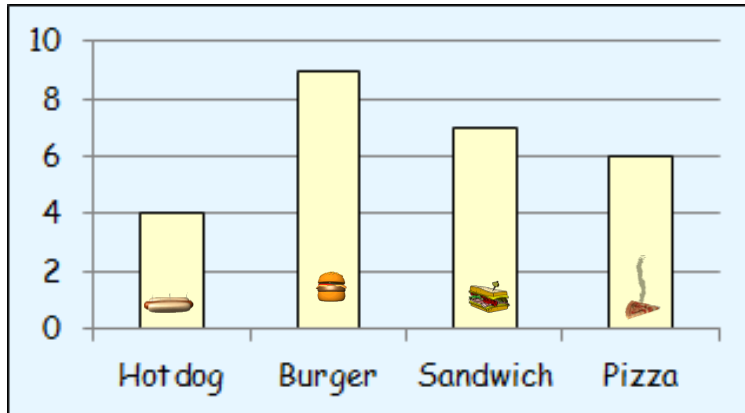
Outcome 1 - Bar Graphs

1



- How many more children prefer hockey than tennis?
- How many more children prefer football than netball?

2



- How many more people chose a sandwich than a hotdog?
- How many more people chose a burger than a pizza?

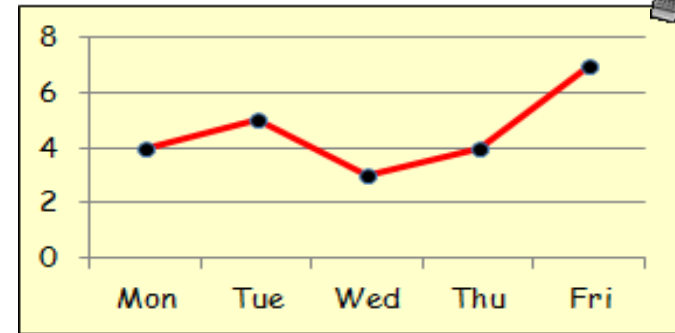
Homework 5

Silver Level

Outcome 2 - Line Graphs

1

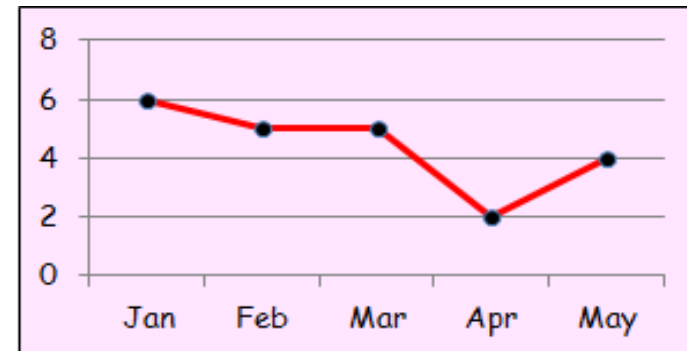
The Line Graph shows the number of hours television watched by Cari during the October week.



How much television did Cari watch altogether?

2

The Line Graph shows the number of pounds Fern lost after going on a diet as her New Year's resolution.



How much weight did Fern lose altogether?