

MNU 2-11c

Homework 5

Silver Level

Outcome 1 - Calculating Perimeter

Calculate the perimeter of the following shapes...

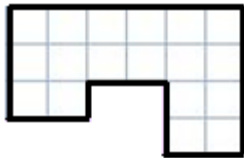
1



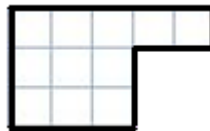
2



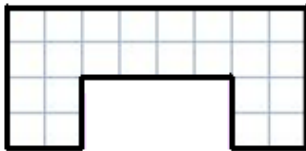
3



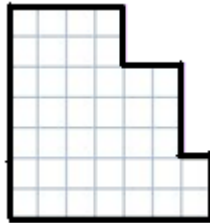
4



5



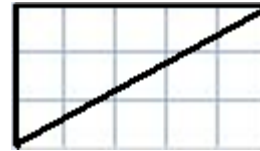
6



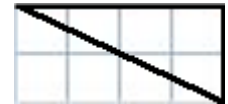
Outcome 2 - Area of a Rectangle/Square

Calculate the area of the following shapes...

1



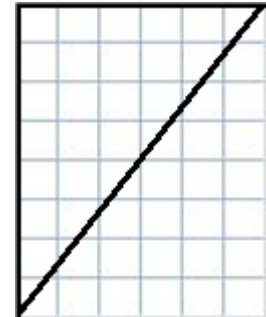
2



3



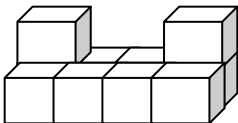
4



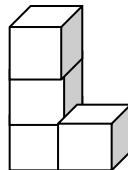
Outcome 3 - Volume of a Cuboid/Cube

Calculate the volume of the following shapes...

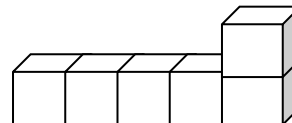
1



2



3



4

