

MNU 2-07a

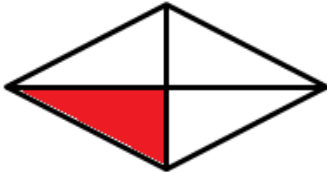
Homework 5

Bronze Level

Outcome 1 - Writing Fractions

What fractions of the shapes below have been shaded?


1



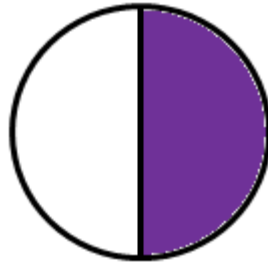
2



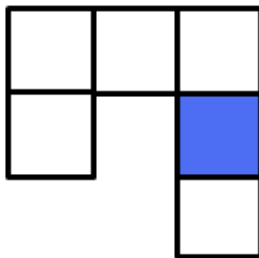
3



4



5



6




Outcome 2 - Shading Fractions

Copy the shapes below and shade the correct fraction...

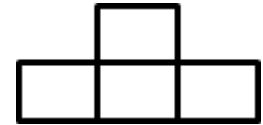
Shade $\frac{1}{2}$

1



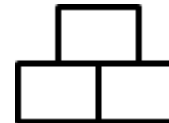
Shade $\frac{1}{4}$

2



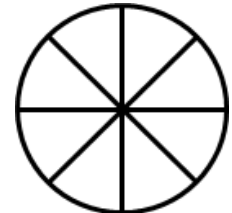
Shade $\frac{1}{3}$

3



Shade $\frac{1}{8}$

4



Shade $\frac{1}{8}$

5



Shade $\frac{1}{6}$

6

