

MNU 2-07a

Homework 5

Silver Level

Outcome 1 - Writing Fractions

What fractions of the shapes below have been shaded?


1



2



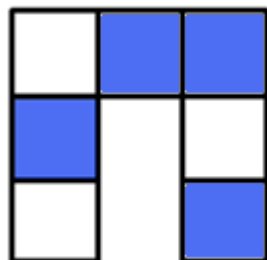
3



4



5



6

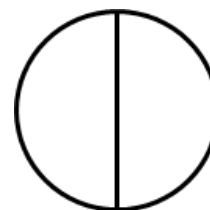


Outcome 2 - Shading Fractions

Copy the shapes below and shade the correct fraction...

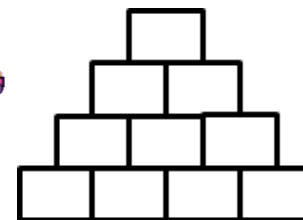
Shade $\frac{1}{2}$

1



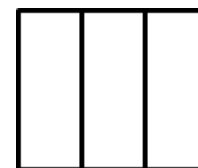
Shade $\frac{7}{10}$

2



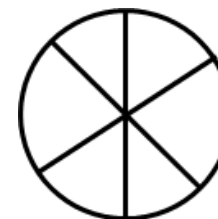
Shade $\frac{2}{3}$

3



Shade $\frac{5}{6}$

4



Shade $\frac{3}{4}$

5



Shade $\frac{2}{5}$

6

