

MNU 2-07a

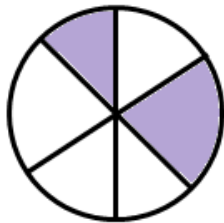
Homework 5

Gold Level

Outcome 1 - Writing Fractions

What fractions, in their simplest form, of the shapes below have been shaded?

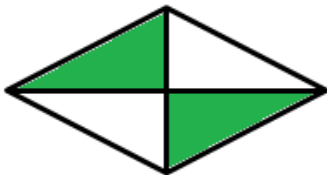
1



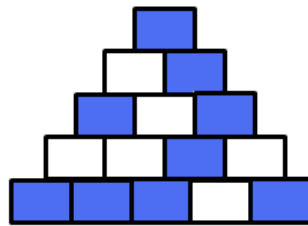
2



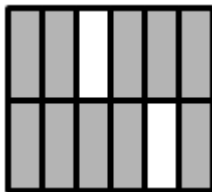
3



4



5



6

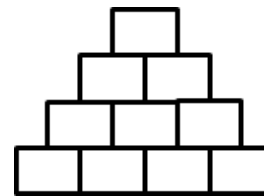


Outcome 2 - Shading Fractions


Copy the shapes below and shade the correct fraction...

Shade $\frac{4}{5}$


1

Shade $\frac{1}{2}$

2

Shade $\frac{1}{3}$

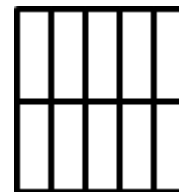
3

Shade $\frac{1}{2}$

4

Shade $\frac{4}{5}$

5

Shade $\frac{1}{5}$

6

