

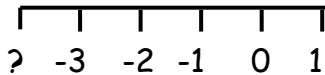
MNU 2-04a

Outcome 1 - Negative Number Lines

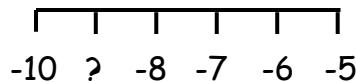
Write down the missing numbers from the following number lines...



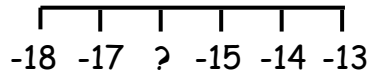
1



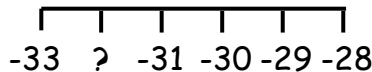
2



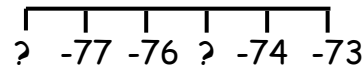
3



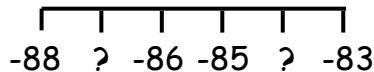
4



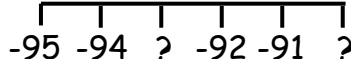
5



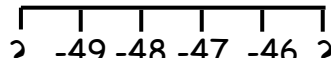
6



7



8



Homework 5

Outcome 2 - Temperature

Calculate the new temperatures for the following...



1

Old temp = 6°C
Fall = 1°C
New temp = ?

2

Old temp = 4°C
Fall = 6°C
New temp = ?

3

Old temp = 6°C
Fall = 6°C
New temp = ?

4

Old temp = 2°C
Fall = 10°C
New temp = ?

5

Old temp = 10°C
Fall = 11°C
New temp = ?

6

Old temp = 4°C
Fall = 20°C
New temp = ?

Outcome 3 - Overdrafts

Write down how much money is in the following bank accounts...



1

Mel is £50 overdrawn. How much money does she have in her bank account?

2

May is £25 overdrawn. How much money does she have in her bank account?

3

Scott is £444 overdrawn. How much money does he have in his bank account?

4

Joe is £907 overdrawn. How much money does he have in his bank account?