

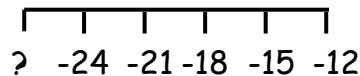
## MNU 2-04a

### Outcome 1 - Negative Number Lines

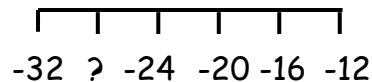
Write down the missing numbers from the following number lines...



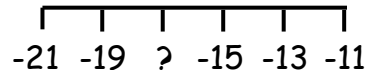
1



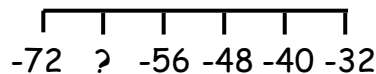
2



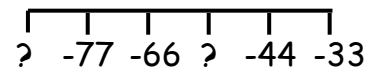
3



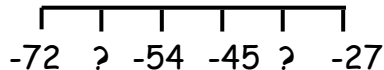
4



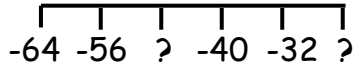
5



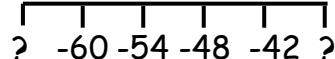
6



7



8



## Homework 5

### Outcome 2 - Temperature

Calculate the new temperatures for the following...

1

Old temp =  $1^{\circ}\text{C}$   
Rise =  $3^{\circ}\text{C}$   
New temp = ?

2

Old temp =  $-1^{\circ}\text{C}$   
Rise =  $8^{\circ}\text{C}$   
New temp = ?

3

Old temp =  $-6^{\circ}\text{C}$   
Rise =  $8^{\circ}\text{C}$   
New temp = ?

4

Old temp =  $-4^{\circ}\text{C}$   
Rise =  $12^{\circ}\text{C}$   
New temp = ?

5

Old temp =  $-7^{\circ}\text{C}$   
Rise =  $7^{\circ}\text{C}$   
New temp = ?

6

Old temp =  $-13^{\circ}\text{C}$   
Rise =  $11^{\circ}\text{C}$   
New temp = ?

## Silver Level



### Outcome 3 - Overdrafts

Write down how much money is in the following bank accounts...



1

Bank balance = £60.  
Purchases = £25 and £20.  
New bank balance = ?

2

Bank balance = £55.  
Purchases = £15 and £80.  
New bank balance = ?

3

Bank balance = £10.  
Purchases = £35 and £20.  
New bank balance = ?

4

Bank balance = £24.  
Purchases = £32 and £19.  
New bank balance = ?