

MNU 2-01a

Homework 5











Bronze Level



Outcome 1

Rounding to the nearest 10











Round the following
to the nearest 10...

 56	 92
 27	 75
 84	 47
 43	 98
 19	 24

Outcome 2

Rounding to one figure of accuracy

Round to one figure of
accuracy and estimate...

 $52 + 49$	 $78 - 53$
 $27 - 11$	 $66 + 88$
 $79 + 34$	 $43 - 28$
 $32 + 97$	 $68 + 74$
 $99 + 96$	 $44 - 11$