





















## MNU 3-08a





















## Homework 5

## Silver Level

### Outcome 1 - Direct Proportion











- |                                                                                                                                                                                                                                  |                                                                                                                                                                                                                                        |
|----------------------------------------------------------------------------------------------------------------------------------------------------------------------------------------------------------------------------------|----------------------------------------------------------------------------------------------------------------------------------------------------------------------------------------------------------------------------------------|
|  1 5 D.V.D.'s cost £55. How much for 7 D.V.D.'s?               |  2 7 beach balls cost £28. <br>How much for 9 beach balls?           |
|  3 2 ice creams cost £1.80. <br>How much for 5 ice creams?     |  4 3 cuddly toys cost £30. How much for 8 cuddly toys?               |
|  5 4 lava lamps cost £100. How much for 9 lava lamps?          |  6 6 bicycles cost £900. <br>How much for 8 bicycles?                |
|  7 8 cans of cola cost £6.40. <br>How much for 3 cans of cola? |  8 3 light bulbs cost £3.90. <br>How much for 7 light bulbs?        |
|  9 4 hamburgers cost £5.20. <br>How much for 7 hamburgers?     |  10 6 air fresheners cost £14.40. <br>How much for 5 air fresheners? |

### Outcome 3 - Ratio Calculations











- |                                                                                                                                                                                                                                            |                                                                                                                                                                                                                                     |
|--------------------------------------------------------------------------------------------------------------------------------------------------------------------------------------------------------------------------------------------|-------------------------------------------------------------------------------------------------------------------------------------------------------------------------------------------------------------------------------------|
|  1 Boys : Girls = 4 : 5<br>12 boys, how many girls?                      |  2 Men : Women = 3 : 4<br>15 men, how many woman?                 |
|  3 Policemen : Policewomen = 5 : 4. 10 policemen, how many policewomen?  |  4 Chefs : Waiters = 2 : 7<br>12 chefs, how many waiters?         |
|  5 Cars : Buses = 8 : 3<br>64 cars, how many buses?                  |  6 Houses : Flats = 2 : 9<br>24 houses, how many flats?       |
|  7 Cars : Passengers = 3 : 9<br>9 cars, how many passengers?         |  8 Cats : Dogs = 6 : 7<br>24 cats, how many dogs?             |
|  9 Sheep : Cows = 5 : 8<br>16 cows, how many sheep?                  |  10 Planets : Stars = 3 : 20<br>320 stars, how many planets?  |

### Outcome 2 - Simplifying Ratio

Simplify the following Ratio...

- |                                                                                                 |                                                                                                  |
|-------------------------------------------------------------------------------------------------|--------------------------------------------------------------------------------------------------|
|  1 8 : 18    |  2 70 : 50    |
|  3 21 : 49   |  4 18 : 60    |
|  5 35 : 60   |  6 20 : 28    |
|  7 27 : 72   |  8 64 : 72    |
|  9 300 : 400 |  10 720 : 800 |

### Outcome 4 - Proportional Division

- |                                                                                                                            |                                                                                                                             |
|----------------------------------------------------------------------------------------------------------------------------|-----------------------------------------------------------------------------------------------------------------------------|
|  1 Divide 30 in the ratio of 2 : 3.     |  2 Share 27 in the ratio of 4 : 5.       |
|  3 Share 90 in the ratio of 3 : 7.      |  4 Divide 55 in the ratio of 2 : 9.      |
|  5 Divide 750 in the ratio of 4 : 11. |  6 Share 810 in the ratio of 2 : 7.    |
|  7 Divide 450 in the ratio of 3 : 2.  |  8 Share 330 in the ratio of 6 : 5.    |
|  9 Share 7000 in the ratio of 7 : 3.  |  10 Divide 3200 in the ratio of 5 : 3. |