



MTH 3-19a

Assessment 5

Gold Level



Name: _____

Score: 5

Percentage: %

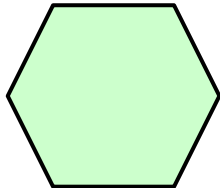
Class: _____

Outcome 1 - Lines of Symmetry


For each shape below, fill in the lines of symmetry...

Shapes

1



2



Road Signs

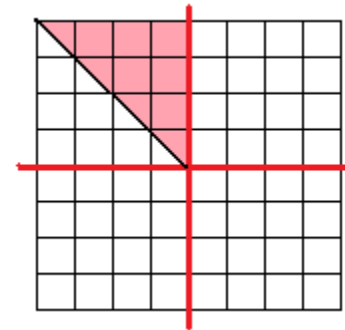
3



Outcome 2 - Reflection in Two Lines of Symmetry

Complete the shape so that the red lines are lines of symmetry...

4



5

