



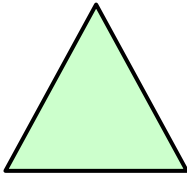
Outcome 1

Two Lines of Symmetry


For each shape below, fill in the lines of symmetry...

Shapes

1



2



Road Signs

3



4

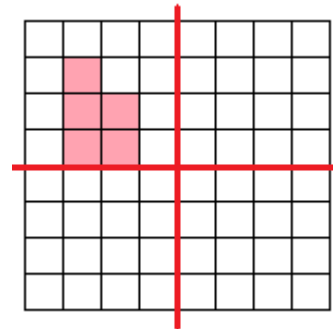


Outcome 2

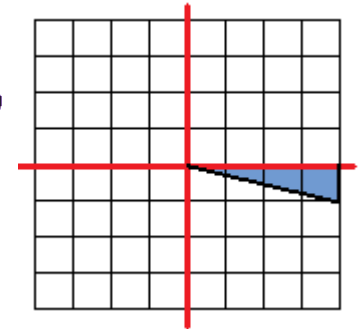
Reflection in One Line of Symmetry

Complete the shape so that the red lines are lines of symmetry...

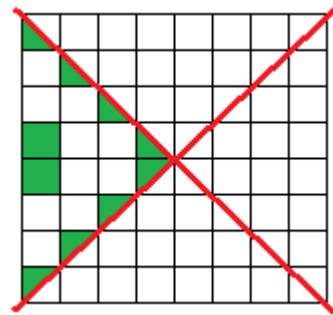
1



2



3



4

