



Name: \_\_\_\_\_

Score:  $\frac{\quad}{5}$

Percentage: %


Class: \_\_\_\_\_

### Outcome 1 - Two Lines of Symmetry


For each shape below, fill in the 2 lines of symmetry...

#### Shapes

1



2



#### Road Signs

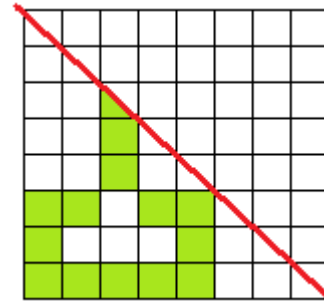
3



### Outcome 2 - Reflection in One Line of Symmetry

Complete the shape so that the red line is a line of symmetry...

4



5

