



MTH 3-19a

Homework 5

Silver Level



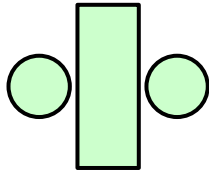
Outcome 1

Two Lines of Symmetry

For each shape below, fill in the 2 lines of symmetry...

Shapes

1



2



Road Signs

3



4

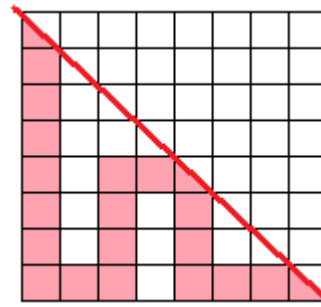


Outcome 2

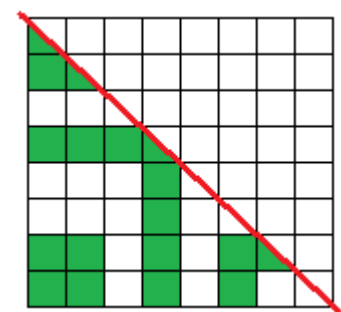
Reflection in One Line of Symmetry

Complete the shape so that the red line is a line of symmetry...

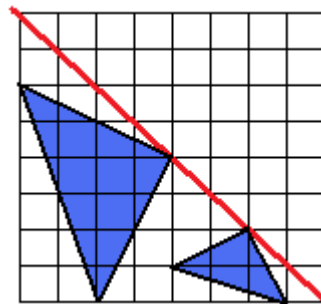
1



2



3



4

