

MTH 3-19a

Assessment 5

Bronze Level

Name: \_\_\_\_\_

Score: 10

Percentage: %

Class: \_\_\_\_\_

## Outcome 1 - One Line of Symmetry

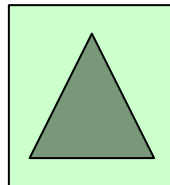
For each shape below, fill in the line of symmetry...

### Shapes

1



2



### Letters

3

V

4

B

### Road Signs

5



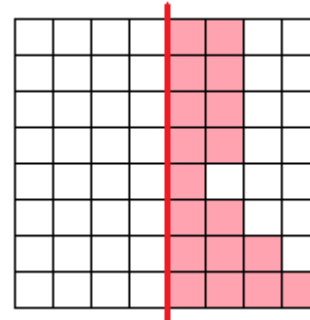
6



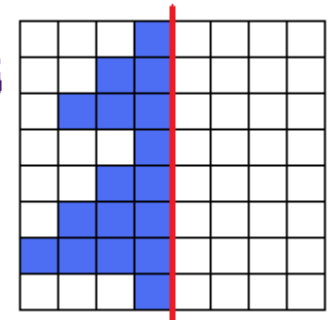
## Outcome 2 - Reflection in One Line of Symmetry

Complete the shape so that the red line is a line of symmetry...

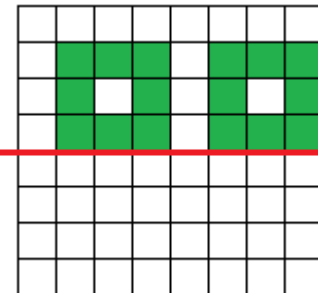
7



8



9



10

