

MTH 3-19a

Homework 5

Bronze Level

Outcome 1

One Line of Symmetry


For each shape below, fill in the line of symmetry...

Shapes

1



2



Letters

3

U

4


C

Road Signs

5



6

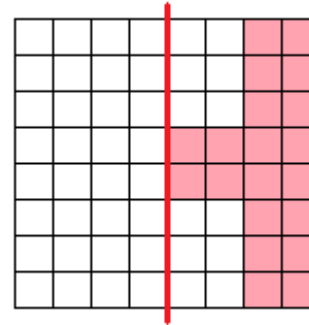


Outcome 2

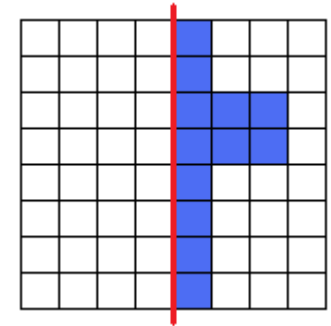
Reflection in One Line of Symmetry

Complete the shape so that the red line is a line of symmetry...

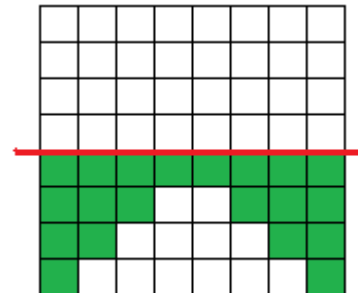
1



2



3



4

