

MTH 3-17c

Assessment 5

Bronze Level

Name: _____









Score: 10

Percentage: %

Class: _____


















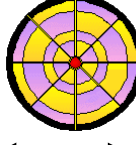
Outcome 1 - Enlargement

Enlarge these shapes by the given scale factors...

 Scale factor = 1	 Scale factor = 2	 Scale factor = 3	 Scale factor = 4
			

Outcome 2 - Calculating Scale Factor

Calculate the following scale factors of enlargement...

  7 cm 4 cm	 14 cm 8 cm	  3 cm 2 cm	 12 cm 8 cm
  7 cm 1 cm	 35 cm 5 cm	  4 cm 3 cm	 24 cm 18 cm
  8 cm 3 cm	 72 cm 27 cm	  9 cm 9 cm	 90 cm 90 cm