

MTH 3-17c

Homework 5

Bronze Level

Outcome 1

Enlargement

Enlarge these shapes by the given scale factors...

1

Scale factor = 6



2

Scale factor = 3



3

Scale factor = 2



4

Scale factor = 4




5

Scale factor = 5



6

Scale factor = 3

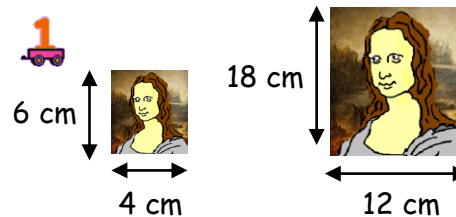


Outcome 2

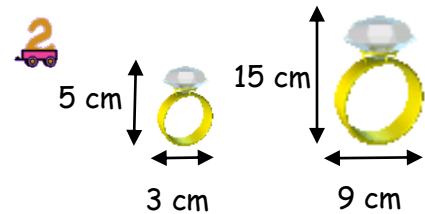
Calculating Scale Factor

Calculate the following scale factors of enlargement...

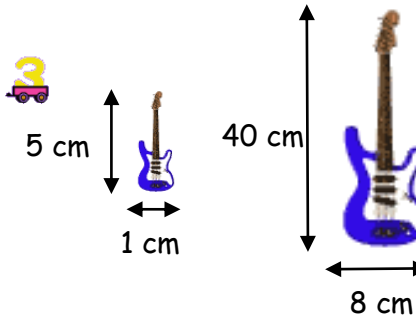
1



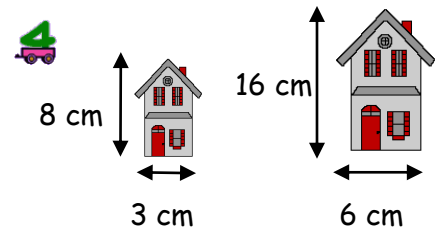
2



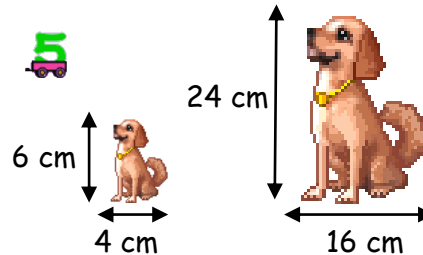
3



4



5



6

