

MTH 3-17b

Assessment 5

Gold Level

Name: \_\_\_\_\_

Score: 10

Percentage: %

Class: \_\_\_\_\_

## Outcome 1 - Scale Drawings


For each of the following, calculate the missing lengths...

1 Scale: 1 cm to 2.5 m




Length of drawing = 14 cm  
Actual Length = m

2 Scale: 1 cm to 4 m



Length of drawing = cm  
Actual Length = 30 m

3 Scale: 1 cm to 12.5 m

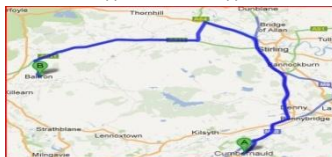


Length of drawing = 10 cm  
Actual Length = m

## Outcome 2 - Reading Maps

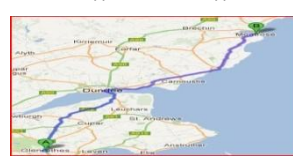
For each of the following, calculate the missing distances...

4 Scale: 1 cm to 3.5 miles



Distance on map = cm  
Actual distance = 49 m

5 Scale: 1 cm to 5.5 miles



Distance on map = 10 cm  
Actual distance = m

6 Scale: 1 cm to 8.5 miles



Distance on map = 30 cm  
Actual distance = m

## Outcome 3 - 3 Figure Bearings

Write down the 3 figure bearings TO Glasgow...

