

MTH 3-17b

Outcome 1 - Scale Drawings

For each of the following, calculate the missing lengths...

1


Scale:
1 cm to 2.5 m



Length of drawing = 11 cm
Actual Length = ? m

2

Scale:
1 cm to 4 m



Length of drawing = ? cm
Actual Length = 10 m

3

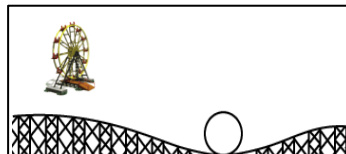
Scale:
1 cm to 6 m



Length of drawing = ? cm
Actual Length = 39 m

4

Scale:
1 cm to 18.5 m

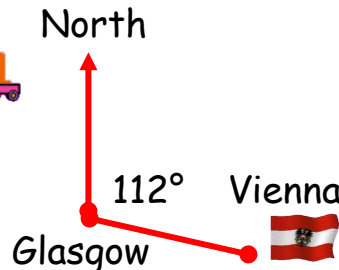


Length of drawing = 8 cm
Actual Length = ? m

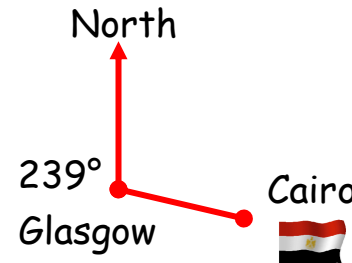
Outcome 3 - 3 Figure Bearings

Write down the following
3 figure bearings from
each place TO Glasgow...

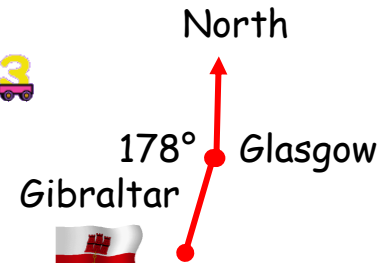
1



2



3



Homework 5

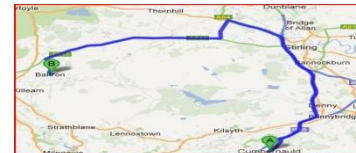
Gold Level

Outcome 2 - Reading Maps

For each of the following, calculate the missing distances...

1

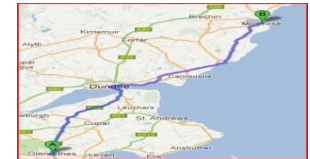
Scale:
1 cm to 3.5 miles



Distance on map = ? cm
Actual distance = 21 m

2

Scale:
1 cm to 4.5 miles



Distance on map = 14 cm
Actual distance = ? m

3

Scale:
1 cm to 7.5 miles



Distance on map = ? cm
Actual distance = 90 m

4

Scale:
1 cm to 5.5 miles



Distance on map = 19 cm
Actual distance = ? m