

MTH 3-17b

Homework 5

Silver Level

Outcome 1 - Scale Drawings

For each of the following, calculate the lengths of the scale drawings...

1


Scale:
1 cm to 3 m



Length of drawing = ? cm
Actual Length = 3 m

2


Scale:
1 cm to 2 m



Length of drawing = ? cm
Actual Length = 14 m

3


Scale:
1 cm to 4 m



Length of drawing = ? cm
Actual Length = 32 m

4

Scale:
1 cm to 30 m



Length of drawing = ? cm
Actual Length = 60 m

Outcome 2 - Reading Maps

For each of the following, calculate the distance between the two places on the maps...

1

Scale:
1 cm to 2 miles



Distance on map = ? cm
Actual distance = 50 m

2

Scale:
1 cm to 4 miles



Distance on map = ? cm
Actual distance = 120 m

3

Scale:
1 cm to 9 miles



Distance on map = ? cm
Actual distance = 45 m

4

Scale:
1 cm to 40 miles

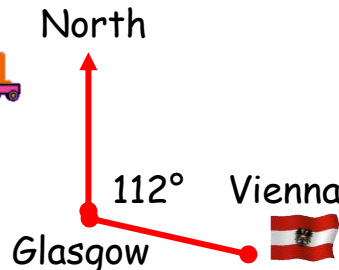


Distance on map = ? cm
Actual distance = 240 m

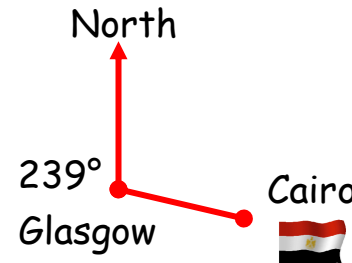
Outcome 3 - 3 Figure Bearings

Write down the following 3 figure bearings FROM Glasgow...

1



2



3

