

MTH 3-16a

Assessment 5

Bronze Level

Name: \_\_\_\_\_

Score: 5

Percentage: %

Class: \_\_\_\_\_

For this exercise you will need...

1

A ruler



2

A pencil



3

A set of compasses



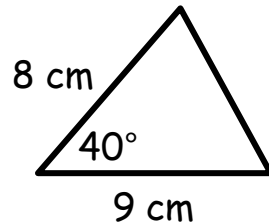
4

A protractor

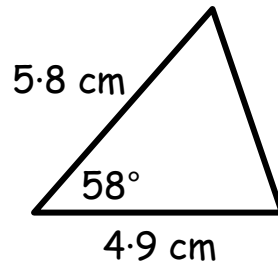
**Outcome 1 - Drawing Triangles**

Make accurate drawings of the following triangles...

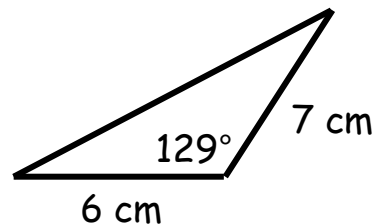
1



2

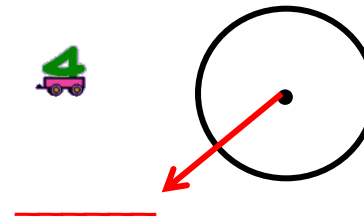


3

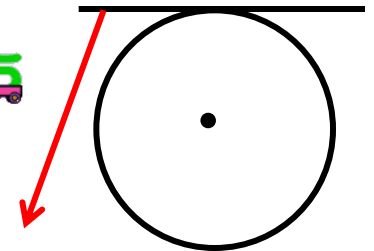
**Outcome 2 - Identifying parts of a circle**

Identify the following circle parts...

4



5



Put drawings on reverse side...

