

MTH 3-16a

Homework 5

Bronze Level

For this exercise you will need...



A ruler



A pencil



A set of compasses



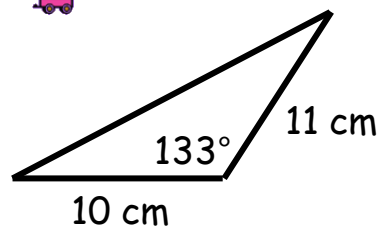
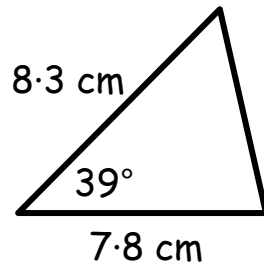
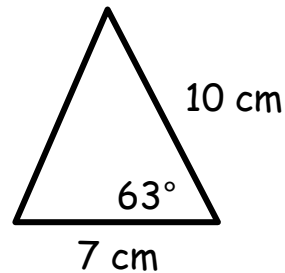
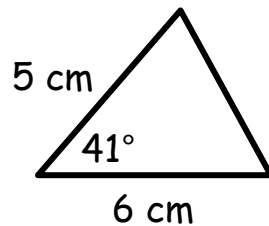
A protractor



Outcome 1

Drawing Triangles

Make accurate drawings of the following triangles...



Outcome 2

Drawing Circles

Make accurate drawings of the following circles...

