



MTH 3-16a

Assessment 5

Silver Level



Name: \_\_\_\_\_

Score: 5

Percentage: %

Class: \_\_\_\_\_

For this exercise you will need...



A ruler



A pencil



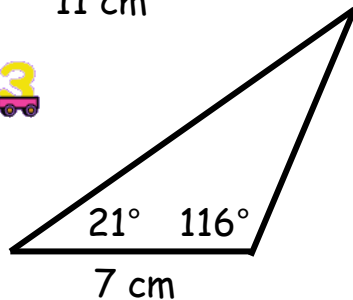
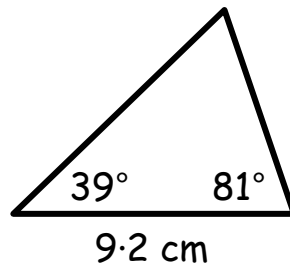
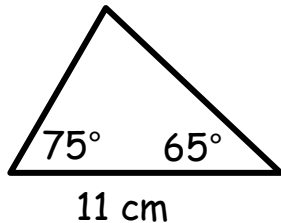
A set of compasses



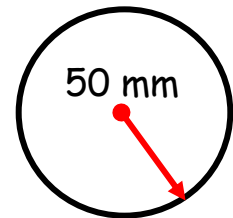
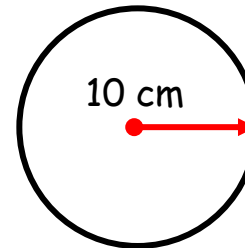
A protractor

**Outcome 1 - Drawing Triangles**

Make accurate drawings of the following triangles...

**Outcome 2 - Drawing Circles**

Make accurate drawings of the following circles...



Put drawings on reverse side...

