



MTH 3-16a

Assessment 5

Gold Level



Name: _____

Score: 5

Percentage: %

Class: _____

For this exercise you will need...

1

A ruler



2

A pencil



3

A set of compasses

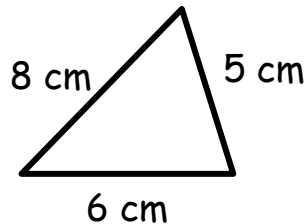


4

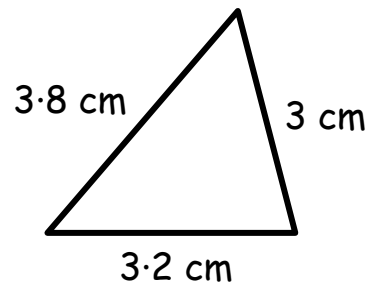
A protractor

**Outcome 1 - Drawing Triangles**Make accurate drawings
of the following triangles...

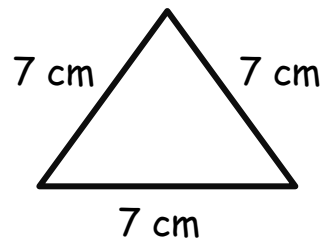
1



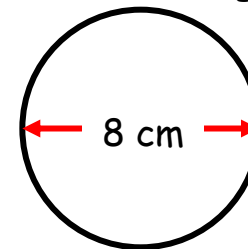
2



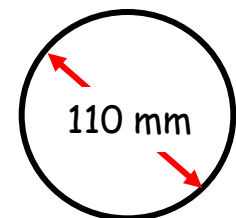
3

**Outcome 2 - Drawing Circles**Make accurate drawings
of the following circles...

4



5

Put drawings
on reverse side...