

MTH 3-13a

Assessment 5

Bronze Level

Name: _____

Score: 10

Percentage: %

Class: _____

Outcome 1 - Sequences

Write down the next two numbers in the following sequences...

1

9, 15, 21, 27,

2

8, 15, 22, 29,

3

27, 35, 43, 51,

4

30, 26, 22, 18,

5

70, 61, 52, 43,


6

95, 84, 73, 62,


Outcome 2 - Simple Linear Patterns

For the following tables, write down a rule and complete the table.

7

C.D.s 	1	2	3	4	5
cost	13	26	39		


8

pizzas	1	2	3	4	5
slices 	10	20	30		

9

burgers	1	2	3	4	5
cost 	6	12	18		

10

books	1	2	3	4	5
cost 	11	22	33		