

MTH 3-13a

Homework 5

Bronze Level

Outcome 1

Sequences

Write down the next two numbers in the following sequences...

 15, 19, 23, 27, ...  14, 23, 32, 41, ...

 12, 19, 26, 33, ...  18, 23, 28, 33, ...

 13, 19, 25, 31, ...  15, 23, 31, 39, ...

 28, 25, 22, 19, ...  105, 95, 85, 75, ...

 95, 93, 91, 89, ...  90, 78, 66, 54, ...


Outcome 2

Simple Linear Patterns


For the following tables...

- Write down a rule
- Complete the table




packs 	1	2	3	4	5
crayons	8	16	24	?	?




feet 	1	2	3	4	5
toes	5	10	15	?	?



taxis	1	2	3	4	5
seats 	7	14	21	?	?



houses 	1	2	3	4	5
windows	4	8	12	?	?