

## MTH 3-11b

## Homework 5

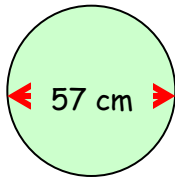
## Bronze Level

### Outcome 1 - Circumference of a Circle

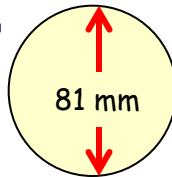
Calculate the circumferences of the following circles...



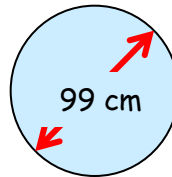
1



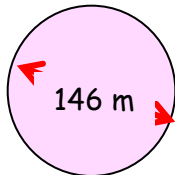
2



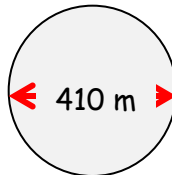
3



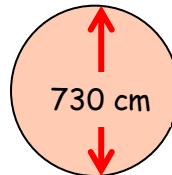
4



5



6

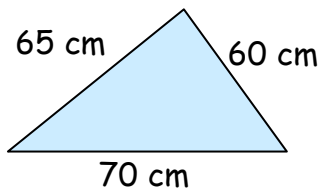


### Outcome 3 - Perimeters

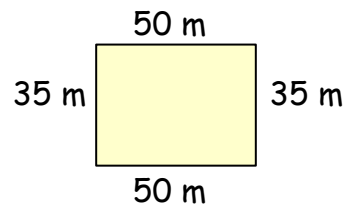
Calculate the perimeters of the following shapes...



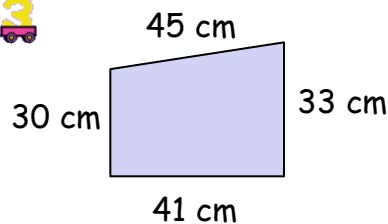
1



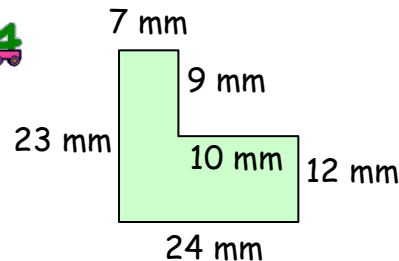
2



3



4

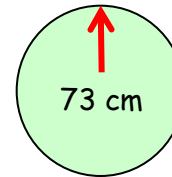


### Outcome 2 - Area of a Circle

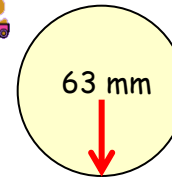
Calculate the areas of the following circles...



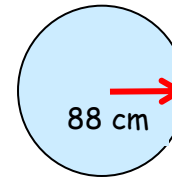
1



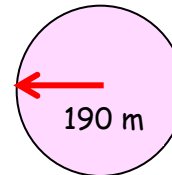
2



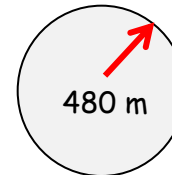
3



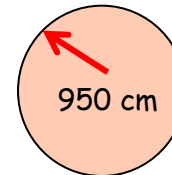
4



5



6

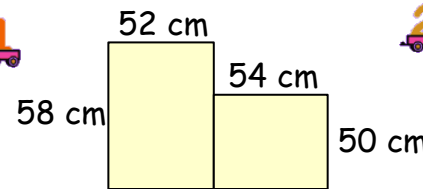


### Outcome 4 - Composite Area

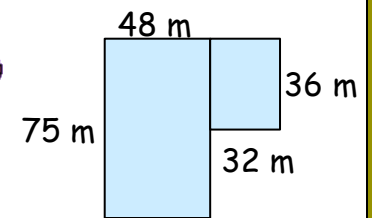
Calculate the areas of the following composite shapes...



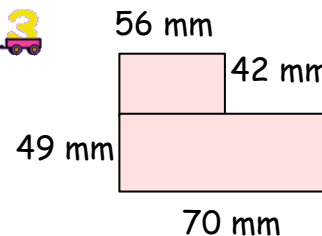
1



2



3



4

