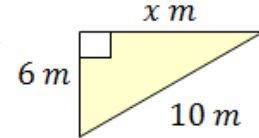
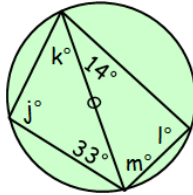





**1** Write  $5 \cdot 23 \times 10^4$  in number form.


**2**  Calculate the length of the missing side.


**3**  Calculate the size of the missing angles...

**4** Calculate  $5\frac{1}{2} - 1\frac{3}{5}$


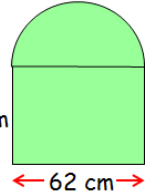
**5** It takes 3 men 12 hours to shovel snow. How long will it take 4 men at this rate? 

**6** Multiply out the following brackets and simplify...  
 $5(x + 8) - 3(2x - 7)$

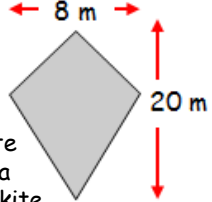
**7** Stevie scored 86 out of 110 in his maths prelim. What was his percentage? Round your answer to the nearest percent. 

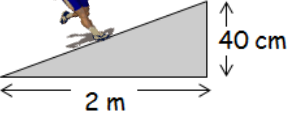
**8** Calculate  $\sqrt{(100 - 36) \div 2^2}$  


**9** A bus is going on a 52 mile school trip. The bus travelled 28.24 miles before taking a short break. It then travelled a further 8.024 miles. How much further does it have to go?

**10**  Calculate the area of this shape... 

**11** Calculate  $56 \times 78$


**12**  Calculate the area of this kite...

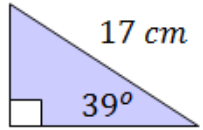
**13** Calculate the gradient of this treadmill... 


**14** Dominic pays £48 for a Valentine's dinner. He tips the waiter 10% of the value of the bill. How much does he pay in total? 

**15**

inch	2.54 cm
foot	30.48 cm


 An American Football player is 6 ft 4 in tall.  How tall is he in metres?


**16** Calculate the length of the missing side. 

**17** Matches are manufactured that must have a tolerance of  $(30 \pm 3.5)$  mm. What are the minimum and maximum lengths of matches that are acceptable? 


**18** Solve the following equation...  
 $9x + 15 = 3 + 5x$

**19** Calculate the median of the following data set...  
8, 2, -4, 5, -6, 1

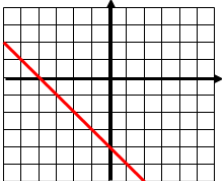
**20** How many 150 ml cups of coffee can be filled from a 3 litre coffee machine? 

**21** An art dealer paid £800 for an oil painting. He sold it for £920. Express this profit as a percentage of what he paid for the painting. 

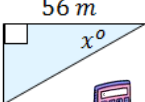

**22** Factorise the following expression...  
 $15a - 24$

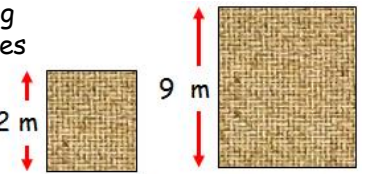
**23** How far did a scooter travel in 36 minutes at an average speed of 7 m.p.h.? 

**24** Calculate  $4232 \div 92$

**25**  Write the equation of the straight line

**26** Find the 'n<sup>th</sup>' term for the following sequence and hence find the 10<sup>th</sup> term;  
4, 10, 16, ...


**27**  Calculate the size of the missing angle. Round your answer to 1 decimal place. 

**28** The following carpet samples are mathematically similar. Calculate the missing area... 

# RIGOUR

by cdmasterworks Ltd

Numeracy for Learning, Life and Work



## February CfE 4<sup>th</sup> Level Calendar

### #abitofmathseveryday



1	2	3	4	5	6
7	8	9	10	11	12
13	14	15	16	17	18
19	20	21	22	23	24
25	26	27	28		