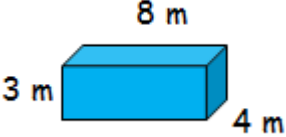







Name:	Date:
<p>Complete the following calculation...</p> $9 \cdot 3 - 15 \cdot 783 + 8 \cdot 5$	MNU 3-03a
<p>Calculate the following volume of the following cuboid...</p> 	MNU 3-11a
<p>Select the prime number(s) from the following list: 24, 35, 49, 54, 65, 79</p>	MTH 3-05b
<p>What is the probability of rolling a dice and getting a score less than 3? </p>	MNU 3-22a
<p>For this set of offers, calculate which one is the "best buy"...</p> <div style="display: flex; justify-content: space-around; align-items: flex-start;"> <div style="border: 1px solid black; padding: 5px; width: 45%;"> <p> PC PLANET!</p> <p>Closing Down Sale! 20% Off All Marked Prices</p>  <p style="background-color: yellow; display: inline-block; padding: 2px;">£340</p> </div> <div style="border: 1px solid black; padding: 5px; width: 45%;"> <p> Easy Electrics!</p> <p>Everything Must Go! 25% Off All Marked Prices</p>  <p style="background-color: yellow; display: inline-block; padding: 2px;">£365</p> </div> </div>	MNU 3-09b
My score:	

