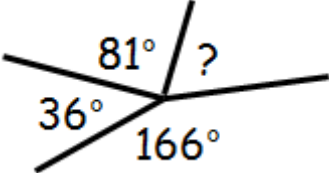

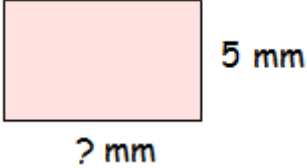


Name:	Date:
Carry out the following calculations... (a) 5000×400 (b) 0.649×100 (c) $450.1 \div 7000$	MNU 3-03b
Express 18 as a product of prime factors...	MTH 3-05b
Calculate the size of the missing angle below... 	MTH 3-17a
8 cans of cola cost £6.40. How much for 3 cans of cola? 	MNU 3-08a
The perimeter of the rectangle below is 26 mm. Calculate the length of the missing side... 	MTH 3-11b
My score:	

