
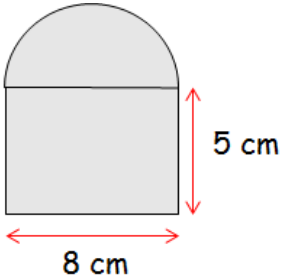
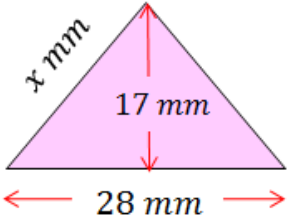
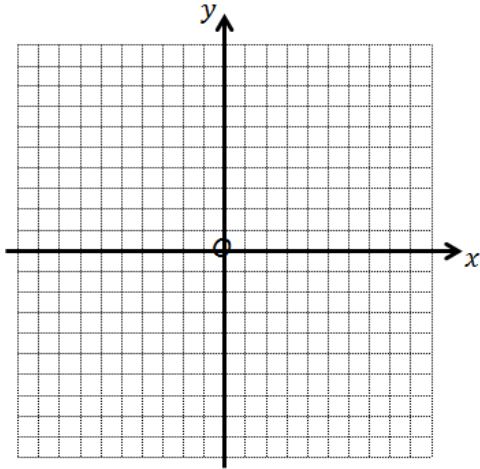


Name:	Date:
<p>874 cans of fizzy juice are to be sold in containers which can hold 9 cans. How many containers are needed to hold all the cans of fizzy juice?</p>	<p>MNU 4-03a</p> 
<p>Solve the following inequality...</p> $9 - 3x < 15$	MTH 4-15a
<p>Calculate the area of the shape below...</p> 	MTH 4-16b
<p>Calculate the perimeter of the triangle below...</p> 	MTH 4-16a
<p>Plot the following points on the coordinate grid shown opposite...</p> <ul style="list-style-type: none"> (a) (5, 9) (b) (-2, 4) (c) (6, -3) (d) (-10, -9) (e) (0, 7) 	
My score:	

