
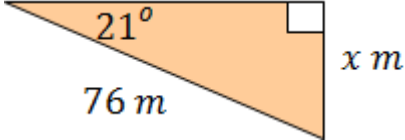

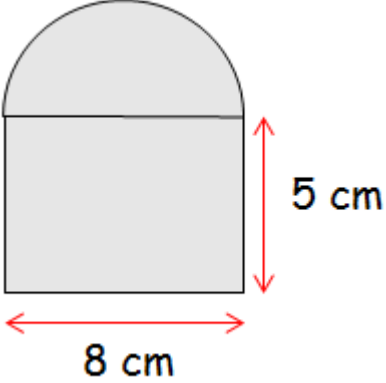


Name:	Date:
<p>To feed some animals in a zoo 6.3 kg of rice was mixed with 4.17 kg of vegetables. The animals ate 8 kg of feed. How much feed is left?</p> 	MNU 4-03a
<p>Solve the following equation...</p> $8x - 15 = 3x + 5$	MTH 4-15a
<p>Calculate the length of the side marked 'x' in the triangle below...</p> 	MTH 4-16a
<p>A plane flies 936 kilometres in 3 hrs 54 mins. What is its average speed?</p> 	MNU 4-10a
<p>Calculate the perimeter of the shape below...</p> 	MTH 4-16b
My score:	

