



Name: _____

Score: $\frac{\quad}{5}$

Percentage: %

Class: _____


Outcome 1 - Calculating Perimeter

Calculate the perimeter of the following shapes...

1




2


**Outcome 2 - Area of a Rectangle/Square**

Calculate the area of the following shapes...

3



4

**Outcome 3 - Volume of a Cuboid/Cube**

Calculate the volume of the shape below...

5

